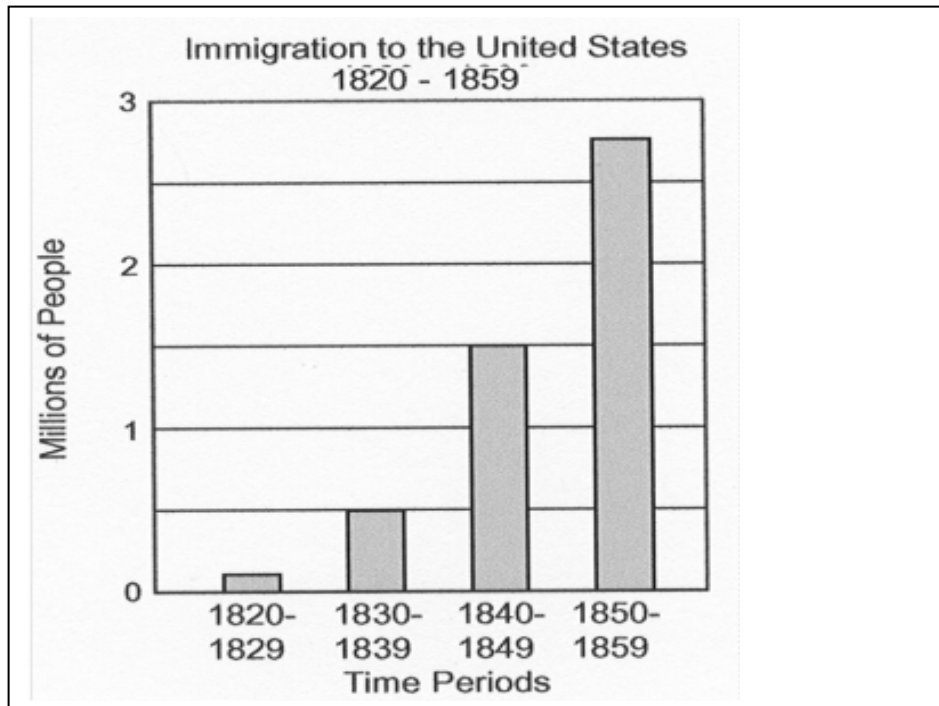


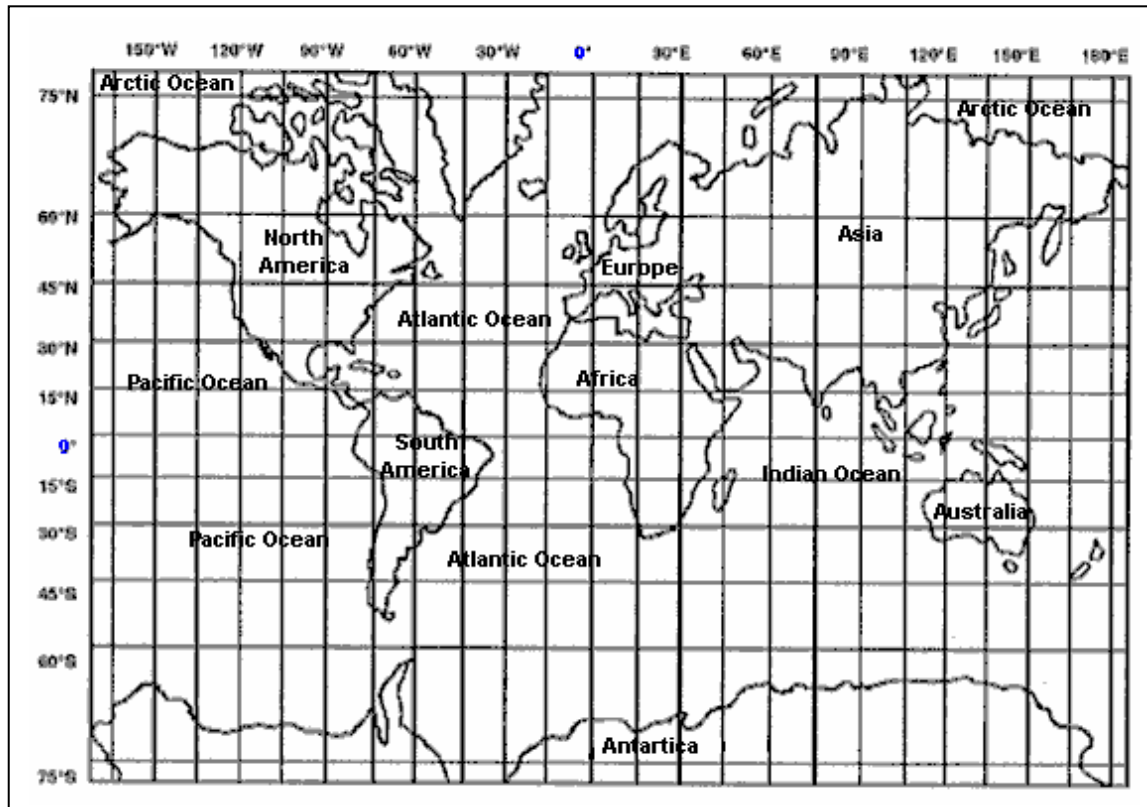
Web Demo and Topics

Grade 5 Civics

1) Which statement about the number of immigrants who came to the United States from 1820 to 1859 is true)The number remained the same.



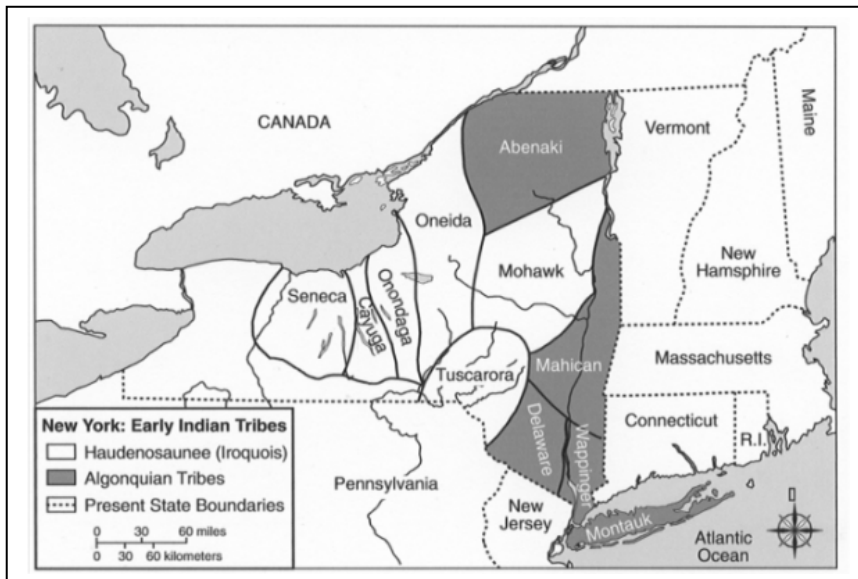
- 1) The number remained the same.
 - 2) The number increased and then decreased.
 - 3) The number kept increasing.
 - 4) The number kept decreasing
- 2) Which continent is located completely in the Southern Hemisphere?



- 1) Europe
 - 2) Africa
 - 3) South America
 - 4) Australia
- 3) Why do most big cities have many high-rise buildings?
 - 1) These buildings look better than houses.
 - 2) Living and working space is needed for many people.
 - 3) The streets are too narrow in most cities.
 - 4) The view is better from high buildings.
 - 4) To vote in the United States, a person must be
 - 1) at least twenty-one years of age and property owner
 - 2) a United States citizen with a full-time job
 - 3) at least eighteen years of age and a United States citizen
 - 4) at least eighteen years of age and male
 - 5) Which statement about the Iroquois (Haudenosaunee) is an opinion?
 - 1) The Iroquois lived in long rectangular buildings called longhouses.
 - 2) Men provided food by hunting and fishing.
 - 3) Women grew, gathered, and cooked food.
 - 4) The Seneca were the best tribe in the Iroquois Confederacy

Grade 5 Civics Essay Questions

- 1) Base your answer to the questions on map below.



- A) How many tribes belonged to the Haudenosaunee (Iroquois Confederacy)?
- B) Which Algonquian tribe was located in what is now known as Long Island?

2)

The native people of North America have always depended upon the natural world for their survival. Watching the changes going on in the natural world with each season, they also look up into the sky and see it changing. In many parts of North America, the native people relate the cycles of the moon (called Grandmother Moon by many Native Americans) to those seasons. In every year there are thirteen of those eight days from one new moon to the next.

Many Native American people look at the turtle's back as a sort of calendar, with its pattern of thirteen large scales standing for

the thirteen moons in each year, and twenty-eight smaller scales standing for the twenty-eight days between each new moon. It remind them that they must try to live in balance.

Tell how Native Americans have used the turtle to explain changes in their natural world.

3) Historical Background:

Some of the words, foods, games, and social customs that are a part of our culture had their beginnings in the early history of New York State. Native American Indians, the Dutch, and the English have all made contributions to our culture today.

Discuss four kinds of contributions made by Native American Indians, the Dutch, and/or English to our culture today.

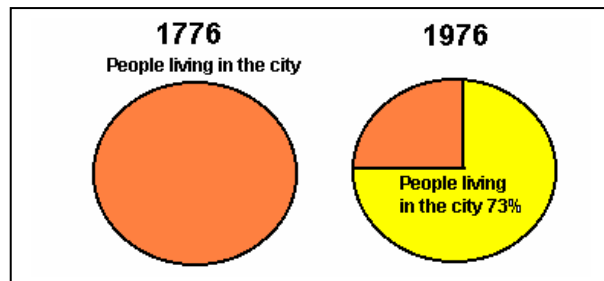
- 1) Include an introduction, body, and a conclusion.
- 2) Include details, examples, or reasons in developing our ideas.

4) Historical Background:

The native peoples of New York State have always used nature and natural resources to meet their needs.

- a) Tell how the Iroquois have used nature and the natural resources around them to meet their needs and wants.
- b) Include an introduction, body, and a conclusion.
- c) Include details, examples, or reasons in developing your ideas.

5) Base your answer to the question on the graphs below.



- A) State the type of community in which most people lived in 1976.
- B) What job did most people have in 1776?
- C) What general statement can be made about the change in where people lived in 1776 and 1976?

Grade 5 Civics Topics

American Indians

Bar Graphs

Bill of Rights

Billing Problems

Branches of Government

Cartoon Interpretation

Declaration of Independence

Early Civilizations

Economic Decisions

Entering Adulthood

Erie canal

Exports and Imports

Graph Interpretation

Immigrant's Social Impact

Income Tax

Industrial revolution

Interpreting Passage

Interpreting Poem

Roman Empire

Interpretation of Pie Charts

Interpretation of Time Lines

Investors - Capitol - Labor & Entrepreneurs

Locations on Earth form Outer Space

Map Interpretation

Map Reading - Latitude & Longitude

Market Economy

Martin Luther King

Mesopotamia - Egypt - China Civilization

Middle Ages

Middle East

National Elections Issues

Natural resources

Physical Features

Post World War II

Religious Traditions

Right of Assembly

Scientific Contribution

Time Line Roman empire

Social Issues
Tariffs
Thomas Jefferson

Trade
U.S. Congress's Role

Grade 5 Civics Essay Topics

Map Interpretation
Cartoon Interpretation
Documents
Interpreting Information
Interpreting Map
Interpreting Picture
Interpreting Pie Graph
Interpreting Poem
Iroquois Indians
Native American Indians - Dutch - English Contributions