

Web Demo & Topics

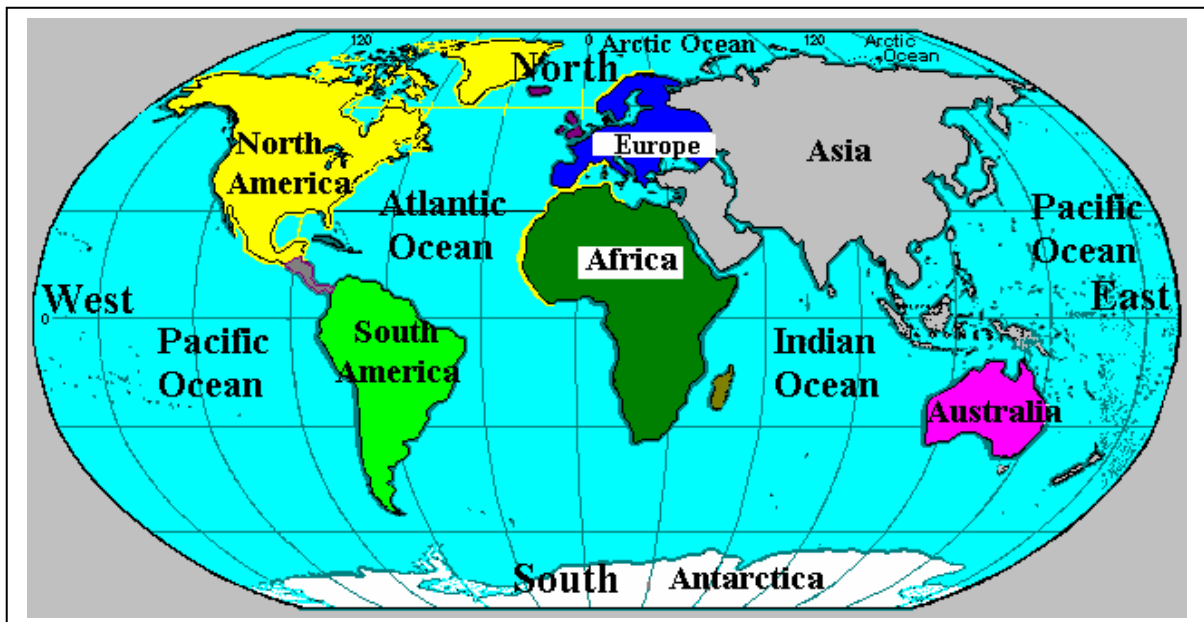
Grade1 - Geography

- 1) The photo shows what the Earth looks like from space;



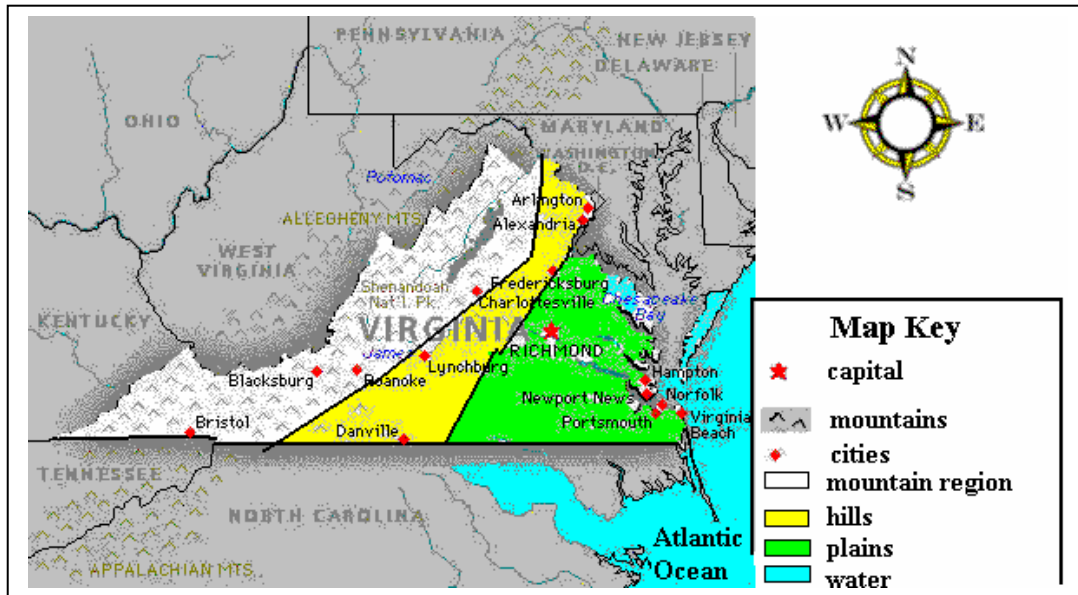
- A) What shape is the Earth?
B) Does the Earth have more water or land?
C) What part of Earth is green?

- 2) Map of the World

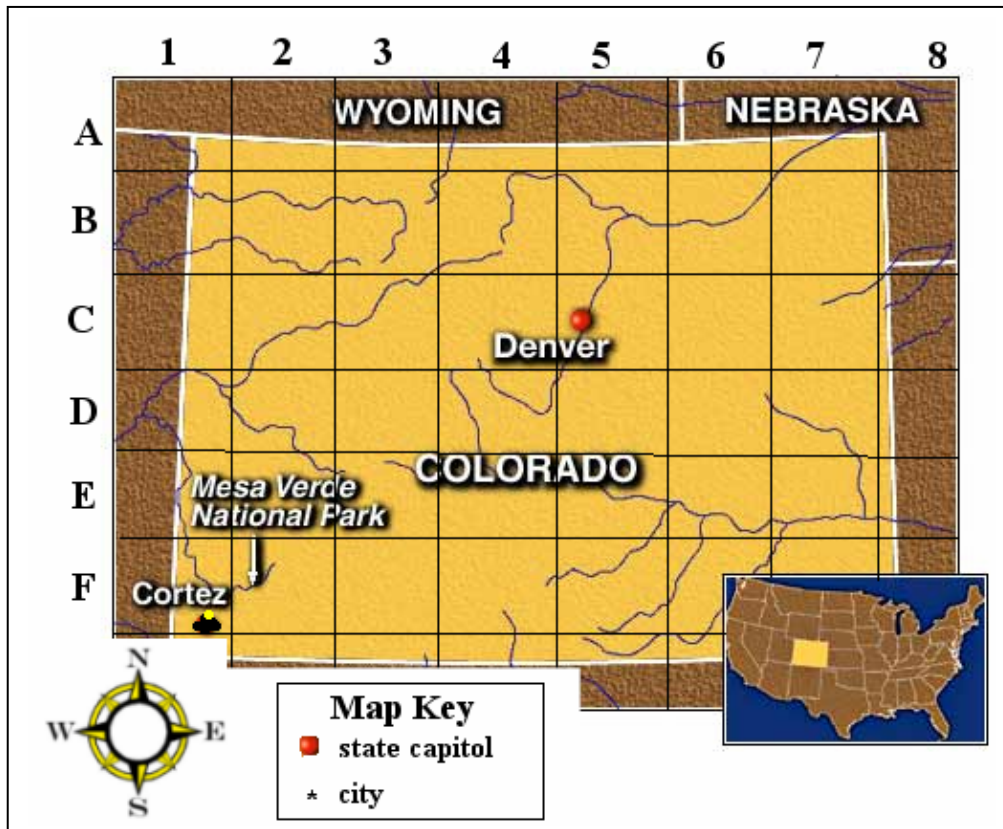


- A) What continent is south of South America?
B) What ocean is north of Europe?
Draw a line from the South Pole to the North Pole.
Are the places below east or west of your line.
C) Australia
D) South America
E) Asia
F) Indian Ocean

3) Look at the Landform Map.



- A) The body of water east of Virginia is _____.
- B) What type of land is the capitol near?
- C) In which part of Virginia do you think there are more farms?
- D) Are the mountains in the west or east part of Virginia?
- 4) The grid helps you find place in Colorado.



- A) In what square is Mesa Verda National Park?
- B) In what square is the capitol of Colorado?
- C) What is in square F1?
- D) What states are north of Colorado?

E) The Colorado enters the state of Colorado at what grid square?

5) An ocean is a large body of salt water.



A body of water that is surrounded by land is a lake.



A stream is water that flows across land most of the year.



A river is water that flows across land all year.



What type of water is in the picture below?



What type of water is in the picture below?



Grade 2 - Geography - Topics

Aerial Views - Identifying Objects

Continents

Compass

Directions

Road Map

Grid Lines

Map Interpretation

Landforms

Resources